

Comparing Integers

Name _____

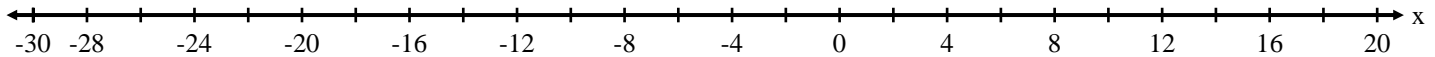
1.



In which situation would you have the least amount of money left in your pocket? The greatest amount of money?

- | | |
|-------------------------|-------------------------|
| A. You just earned \$10 | B. You just earned \$20 |
| C. You just spent \$10 | D. You just spent \$20 |

Plot each amount on the number line below.



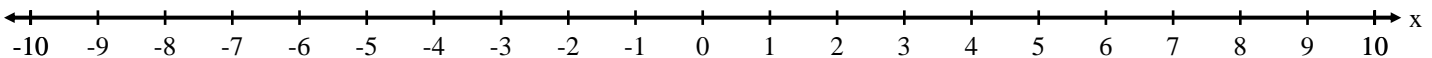
2.



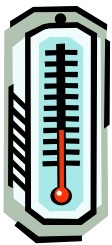
In which situation would you be at the lowest point? The highest point?

- | | |
|---------------------------------|-------------------------------------|
| A. You climb 6 feet up the mast | B. You dove 6 feet under the water. |
| C. You are the water surface. | D. You are snorkeling 3 feet under. |

Plot each depth on the number line below.



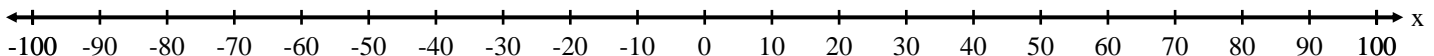
3.



In which situation would you feel hottest? The coldest?

- | | |
|------------------------------------------------------------|-----------------------------------------------|
| A. Your average body temperature is 37°C . | B. You are outside in 0° . |
| C. You have a fever of 100°F . | D. You are in Alaska at 65° below 0. |

Plot each temperature on the number line below.



4.



In a football game, which would be the best play? The worst play?

- | | |
|-------------------------------------------------------------|--------------------------------|
| A. You lose 3 yards. | B. You run for a 12 yard gain. |
| C. You drop the ball 10 yards behind the line of scrimmage. | |
| D. You ran the ball 15 yards. | |

Plot each gain or loss on the number line below.

